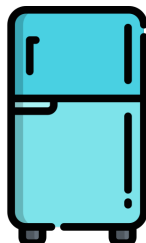




Name: \_\_\_\_\_

## Weight: Which Object is Lighter?

Directions: For each group, circle the object that weighs the least.



# ANSWER KEY

