




Name: _____

Practice with Pie Charts

Directions: On a field trip to the zoo, students had to choose which feeding they wanted to watch. The pie chart shows data about what students chose. Answer the questions about the pie chart.



1. Which animal was chosen the most? _____
2. Which animal was chosen the least? _____
3. Which animal was chosen by more students: Bears or Lions? _____
4. Which animal was chosen by fewer students: Giraffes or Penguins? _____
5. Did more students choose Penguins or Bears? _____
6. List the animals from most popular to least popular:

ANSWER KEY

1. Which animal was chosen the most? **Lions**
2. Which animal was chosen the least? **Giraffes**
3. Which animal was chosen by more students: Bears or Lions? **Lions**
4. Which animal was chosen by fewer students: Giraffes or Penguins? **Giraffes**
5. Did more students choose Penguins or Bears? **Penguins**
6. List the animals from most popular to least popular:

Lions, Elephants, Penguins, Bears, Giraffes