



Name: _____

Measuring Using a Ruler


Directions: Measure each object using the given ruler.



The object is _____ inches long.



The object is _____ inches long.



The object is _____ inches long.



The object is _____ inches long.

ANSWER KEY

4 inches

1 inch

8 inches

9 inches