








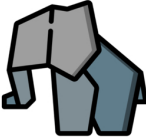










Name: _____

READY FOR A CHALLENGE?

Directions: Use your math skills to find the value of each symbol in the multiplication table below:

			
	35		
	49		
	63	81	108

	<input type="text"/>		<input type="text"/>		<input type="text"/>
	<input type="text"/>		<input type="text"/>		<input type="text"/>
	<input type="text"/>		<input type="text"/>		

Key:

Pinwheel=7

Elephant=9

Pig=12

Star=63

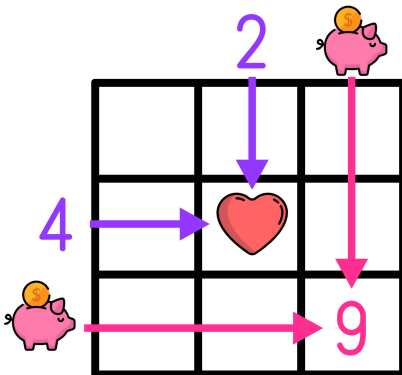
Frog=45

Dog=60

Fox=5

Boat=84

Multiplication tables work like a Bingo Board where each box represents the product of its corresponding column and row.



$$\text{♥} = 2 \times 4 \rightarrow \text{♥} = 8$$

$$9 = \text{pig} \times \text{pig} \rightarrow \text{pig} = 3$$