



















Name: _____

READY FOR A CHALLENGE?

Directions: Use your math skills to find the value of each symbol in the multiplication table below:

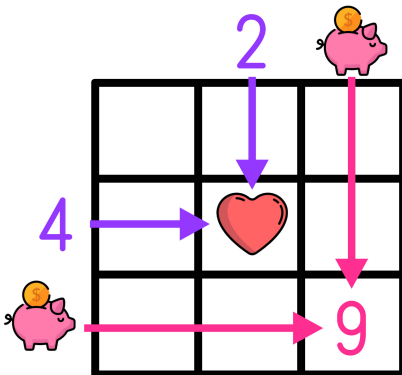
			3
2			
		25	
	48	30	

	<input type="text"/>		<input type="text"/>		<input type="text"/>
	<input type="text"/>		<input type="text"/>		<input type="text"/>
	<input type="text"/>		<input type="text"/>		

Key:

- Witch=8
- Sunglasses=5
- Construction=6
- Cowboy=10
- Mowhawk=16
- Hair Bun=40
- Pony Tail=18
- Mummy=15

Multiplication tables work like a Bingo Board where each box represents the product of its corresponding column and row.



$$\text{♥} = 2 \times 4 \rightarrow \text{♥} = 8$$

$$9 = \text{piggy bank} \times \text{piggy bank} \rightarrow \text{piggy bank} = 3$$