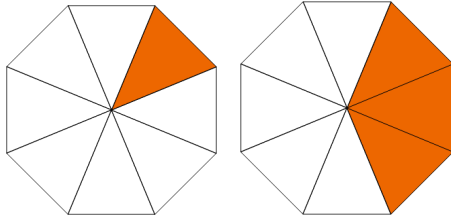


Name: _____

Comparing Fractions

Directions: Circle the correct fraction.

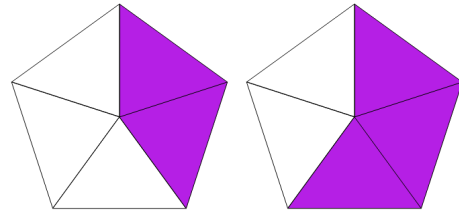
1. Which is greater?



$$\frac{1}{8}$$

$$\frac{3}{8}$$

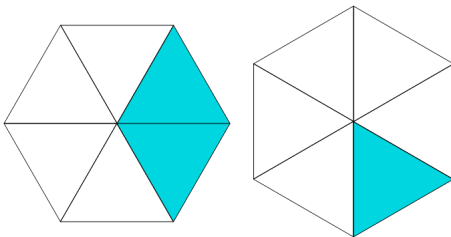
4. Which is smaller?



$$\frac{2}{5}$$

$$\frac{3}{5}$$

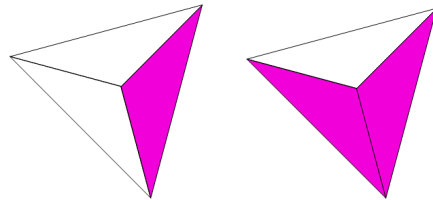
2. Which is smaller?



$$\frac{2}{6}$$

$$\frac{1}{6}$$

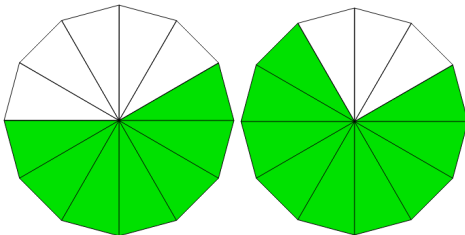
5. Which is greater?



$$\frac{1}{3}$$

$$\frac{2}{3}$$

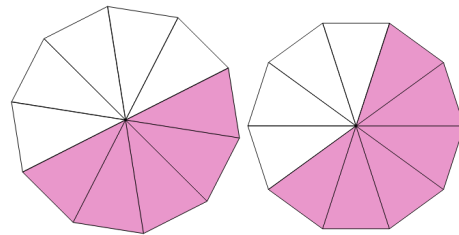
3. Which is greater?



$$\frac{7}{12}$$

$$\frac{9}{12}$$

6. Which is smaller?

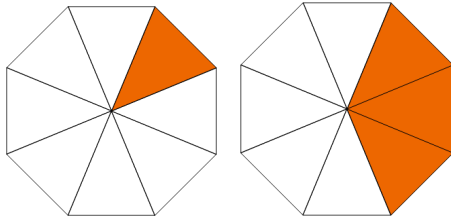


$$\frac{5}{9}$$

$$\frac{6}{9}$$

ANSWER KEY

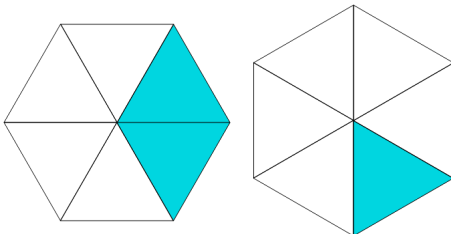
1. Which is greater?



$$\frac{1}{8}$$

$$\frac{3}{8}$$

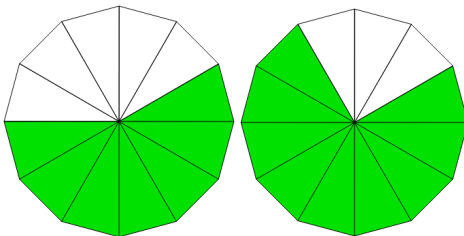
2. Which is smaller?



$$\frac{2}{6}$$

$$\frac{1}{6}$$

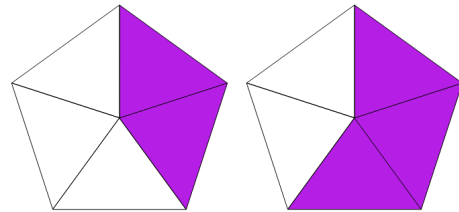
3. Which is greater?



$$\frac{7}{12}$$

$$\frac{9}{12}$$

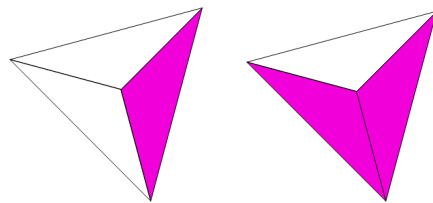
4. Which is smaller?



$$\frac{2}{5}$$

$$\frac{3}{5}$$

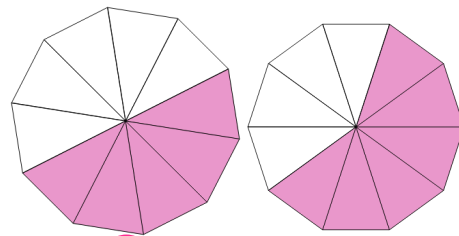
5. Which is greater?



$$\frac{1}{3}$$

$$\frac{2}{3}$$

6. Which is smaller?



$$\frac{5}{9}$$

$$\frac{6}{9}$$