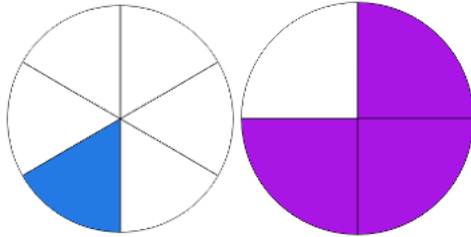


Name: \_\_\_\_\_

# Comparing Fractions

Directions: Circle the fraction that is SMALLER.

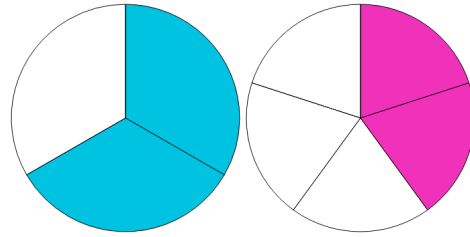
1.



$$\frac{1}{6}$$

$$\frac{3}{4}$$

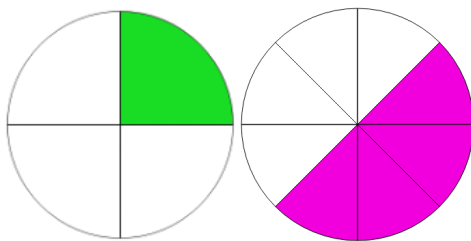
4.



$$\frac{2}{3}$$

$$\frac{2}{5}$$

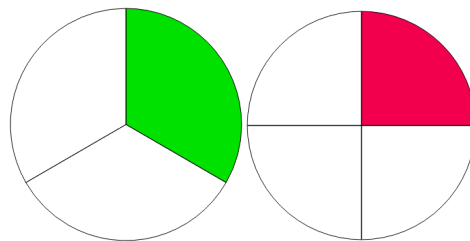
2.



$$\frac{1}{4}$$

$$\frac{4}{8}$$

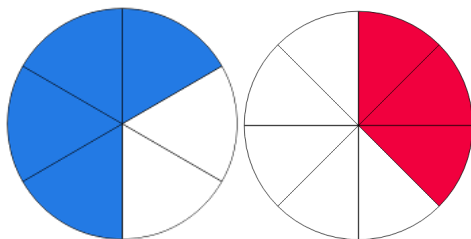
5.



$$\frac{1}{3}$$

$$\frac{1}{4}$$

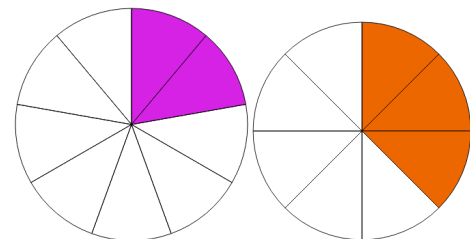
3.



$$\frac{4}{6}$$

$$\frac{3}{8}$$

6.

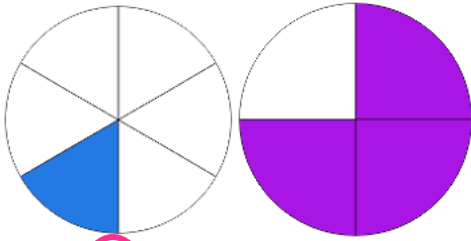


$$\frac{2}{9}$$

$$\frac{3}{8}$$

# ANSWER KEY

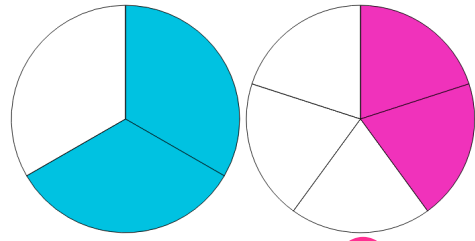
1.



$$\frac{1}{6}$$

$$\frac{3}{4}$$

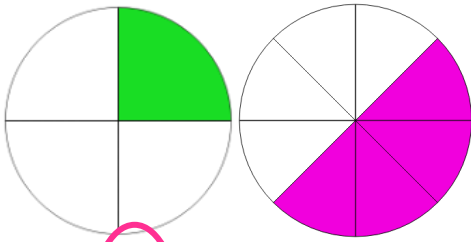
4.



$$\frac{2}{3}$$

$$\frac{2}{5}$$

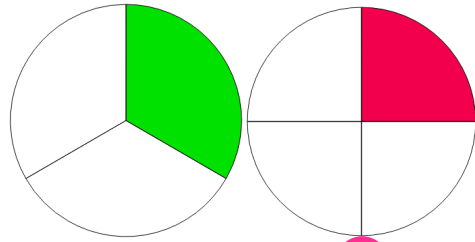
2.



$$\frac{1}{4}$$

$$\frac{4}{8}$$

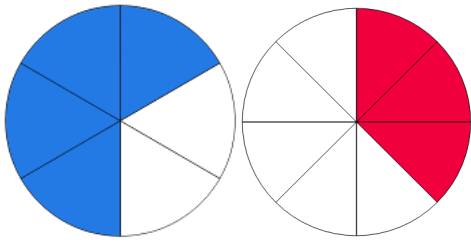
5.



$$\frac{1}{3}$$

$$\frac{1}{4}$$

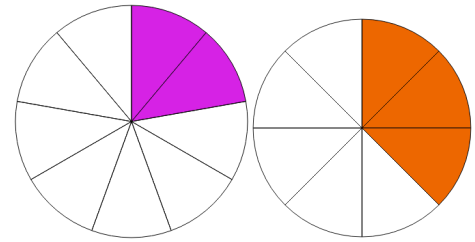
3.



$$\frac{4}{6}$$

$$\frac{3}{8}$$

6.



$$\frac{2}{9}$$

$$\frac{3}{8}$$