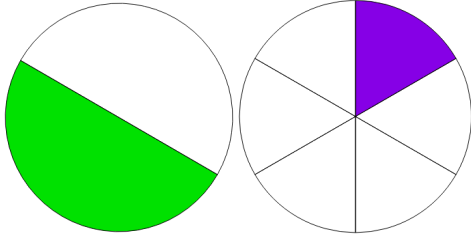


Name: _____

Comparing Fractions

Directions: Circle the fraction that is GREATER.

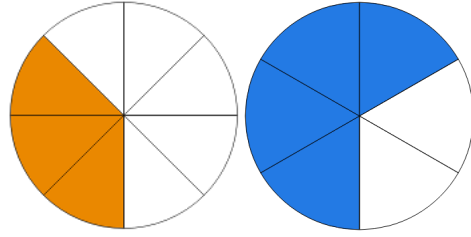
1.



$$\frac{1}{2}$$

$$\frac{1}{6}$$

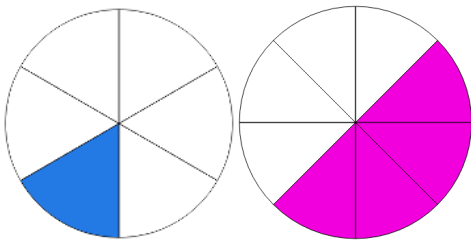
4.



$$\frac{3}{8}$$

$$\frac{4}{6}$$

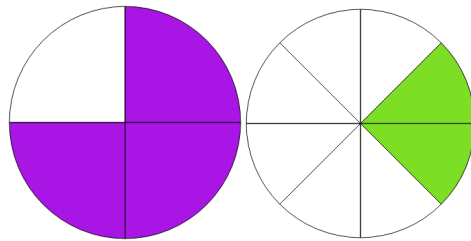
2.



$$\frac{1}{6}$$

$$\frac{4}{8}$$

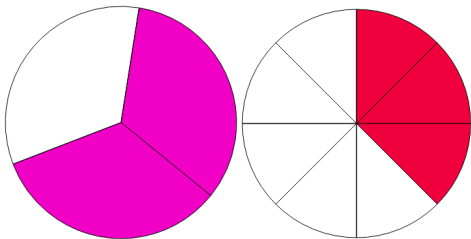
5.



$$\frac{3}{4}$$

$$\frac{2}{8}$$

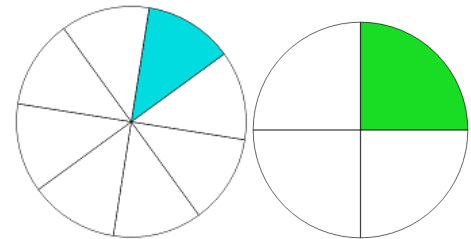
3.



$$\frac{2}{3}$$

$$\frac{3}{8}$$

6.

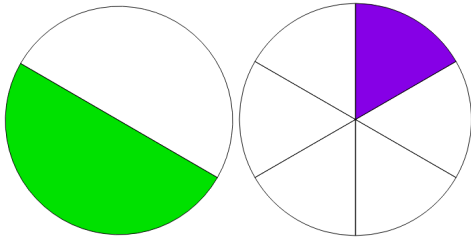


$$\frac{1}{8}$$

$$\frac{1}{4}$$

ANSWER KEY

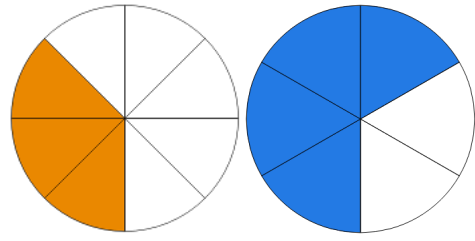
1.



$$\frac{1}{2}$$

$$\frac{1}{6}$$

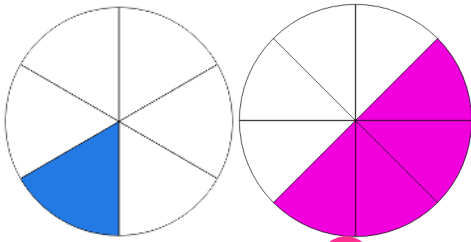
4.



$$\frac{3}{8}$$

$$\frac{4}{6}$$

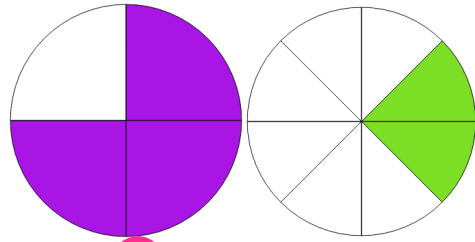
2.



$$\frac{1}{6}$$

$$\frac{4}{8}$$

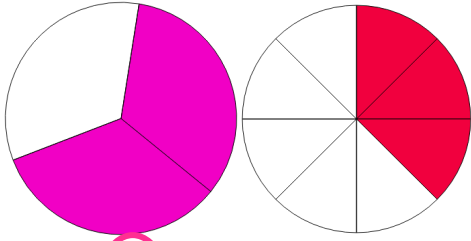
5.



$$\frac{3}{4}$$

$$\frac{2}{8}$$

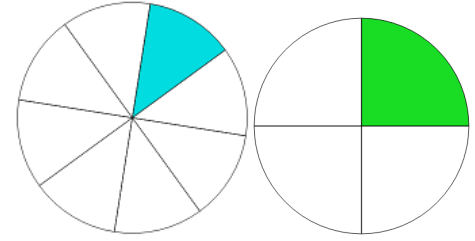
3.



$$\frac{2}{3}$$

$$\frac{3}{8}$$

6.



$$\frac{1}{8}$$

$$\frac{1}{4}$$