



Name: _____

Practice Adding Using Pictures

Directions: Count the shapes and rewrite the equation using numbers, then find the sum.




 $+$



 \rightarrow
 $\underline{\hspace{2cm}} + \underline{\hspace{2cm}} = \underline{\hspace{2cm}}$

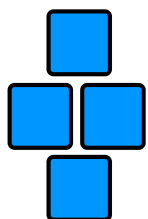
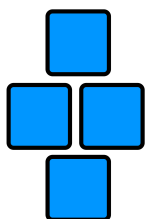

 $+$

 \rightarrow
 $\underline{\hspace{2cm}} + \underline{\hspace{2cm}} = \underline{\hspace{2cm}}$



 $+$

 \rightarrow
 $\underline{\hspace{2cm}} + \underline{\hspace{2cm}} = \underline{\hspace{2cm}}$



 $+$

 \rightarrow
 $\underline{\hspace{2cm}} + \underline{\hspace{2cm}} = \underline{\hspace{2cm}}$


 $+$

 \rightarrow
 $\underline{\hspace{2cm}} + \underline{\hspace{2cm}} = \underline{\hspace{2cm}}$


 $+$

 \rightarrow
 $\underline{\hspace{2cm}} + \underline{\hspace{2cm}} = \underline{\hspace{2cm}}$




+



→

_____ + _____ = _____



+




→

_____ + _____ = _____




+




→

_____ + _____ = _____

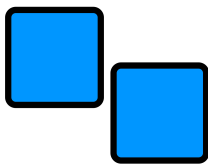


+

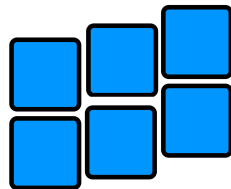


→

_____ + _____ = _____




+



→

_____ + _____ = _____

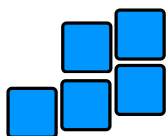


+



→

_____ + _____ = _____



+






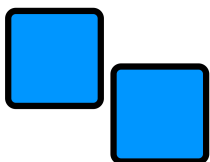
→



_____ + _____ = _____



ANSWER KEY

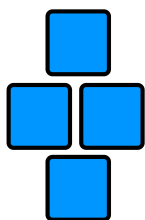
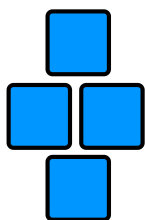
 +  → $2 + 1 = 3$



 +  → $1 + 3 = 4$

 +  → $2 + 2 = 4$

 +  → $3 + 2 = 5$



 +  → $3 + 4 = 7$

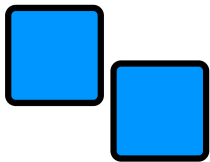
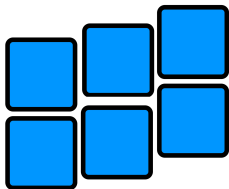
 +  → $4 + 4 = 8$



 +  → $3 + 3 = 6$

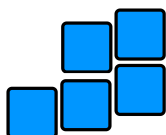

 +  → $6 + 1 = 7$

 +  → $5 + 4 = 9$

 +  → $6 + 3 = 9$

 +  → $2 + 6 = 8$

 +  → $3 + 7 = 10$

 +  → $5 + 5 = 10$