




Name: _____


TWO TRUTHS & ONE LIE!




**Which of the three statements below is a lie?
Explain how you made your choice.**



 = $\frac{5}{9}$



 = $\frac{10}{9}$

 = $\frac{1}{9}$

 = $\frac{1}{3}$

(1)  <  < 

(2)  < **1** < 

(3)  >  > **-1**

KEY

Statement 2 is a lie!



Want 100+ More 2T1L Math Activities for Grades 3-8?

You can now get our best-selling workbooks:

101 'Two Truths and One Lie!' Math Activities for Grades 3-5

101 'Two Truths and One Lie!' Math Activities for Grades 6-8

As a PDF e-Book by visiting: www.mashupmath.com/shop

And a paperback workbook on Amazon!

