

Name: _____








Write the Total Value (United States)

Directions: Count the coins and match them with their total value.



	<p>=</p>	<p>_____ ¢</p>
	<p>=</p>	<p>_____ ¢</p>
	<p>=</p>	<p>_____ ¢</p>
	<p>=</p>	<p>_____ ¢</p>
	<p>=</p>	<p>_____ ¢</p>
	<p>=</p>	<p>_____ ¢</p>
	<p>=</p>	<p>\$ _____</p>

ANSWER KEY

	=	4¢
	=	16¢
	=	27¢
	=	21¢
	=	17¢
	=	40¢
	=	\$1.00