




Name: \_\_\_\_\_

## Weight: Which Object is Heavier?

Directions: For each group, circle the object that weighs the most.



# ANSWER KEY

