




Name: _____

Date: _____



TWO TRUTHS & ONE LIE!

Use your math skills to determine which of the three statements below is a dirty lie! Explain how you made your decision.

If  = 5,  = -8, &  = -1,

then each of the following equations are true.

1) $29 = \frac{2}{5} \left(\text{waffle icon} \right) + 27$

2) $-4 \left(\text{maple syrup bottle icon} + 14 \right) = -3 \left(\text{maple syrup bottle icon} \right)$

3) $3 \left(\text{maple syrup bottle icon} \right) + \text{butter knife icon} = \text{maple syrup bottle icon} - 18 - \text{butter knife icon}$

My Answer: _____

Key: 2