

Name: _____

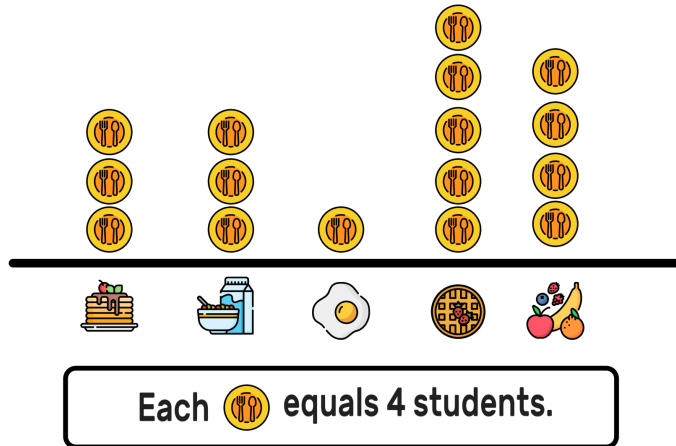
Date: _____







TWO TRUTHS & ONE LIE!

Use your math skills to determine which of the three statements below is a dirty lie! Explain how you made your decision.

Favorite Breakfast Foods



1. Only 4 students chose 
2. 20 total students chose 
3. The number of students that chose  was 4 more than the number that chose 

My Answer: _____

Key: 3