












Name: _____







★★★ *November 11th* ★★★

VETERANS DAY

Honoring ALL Who Served

Directions: Use your math skills to find the value of each symbol in the multiplication table below:

	4		
2			8
			
		64	

	<input type="text"/>		<input type="text"/>
	<input type="text"/>		<input type="text"/>
	<input type="text"/>		<input type="text"/>

Key:

Jet=8, Medic=4, Medal=16, Soldier=32, Ship=16, Tank=32

Multiplication tables work like a Bingo Board where each box represents the product of its corresponding column and row.

