






Name: \_\_\_\_\_



# Happy Thanksgiving!

## TWO TRUTHS & ONE LIE!

Use your math skills to determine which of the three statements below is a fib! Explain how you made your decision.

FOOD		TOTAL CALORIES
ROAST TURKEY		1,098
MASHED POTATOES		3,792
BISCUITS AND GRAVY		4,976
CRANBERRY SAUCE		265
APPLE PIE		3,941

- A)** Mashed Potatoes has fewer calories than Apple Pie, but more calories than Roast Turkey.
- B)** There are more calories in Mashed Potatoes and Roast Turkey combined than there are in Biscuits and Gravy.
- C)** There are more calories in Apple Pie than there are in Roast Turkey and Cranberry Sauce combined.

My Answer: \_\_\_\_\_

Answer Key: B