

Name: _____





Happy Thanksgiving!

TWO TRUTHS & ONE LIE!



Use your math skills to determine which of the three statements below is a fib! Explain how you made your decision.


A)

	7
---	---


 →  = 33
 $\underbrace{\hspace{140px}}_{40}$


B)

	13	
---	----	---

 →  = 12
 $\underbrace{\hspace{120px}}_{35}$

C)

29	
----	---

 →  = 21
 $\underbrace{\hspace{160px}}_{50}$

My Answer: _____

Answer Key: B