

Name: _____

Date: _____



TWO TRUTHS & ONE LIE!

Use your math skills to determine which of the three statements below is a dirty lie! Explain how you made your decision.

FOOD MENU



\$2.77




\$2.89





\$7.88



\$1.32

1)  $\times 3 < \underline{\$3.99}$

2)  $+ \img alt="Queso dip icon" data-bbox="373 574 468 643"/> = \underline{\$8.33}$

3)  $\times 10 + \img alt="Soda can icon" data-bbox="408 711 456 774"/> $\times 8 < \underline{\$89.99}$$

My Answer: _____

Key: 2