

Name: \_\_\_\_\_

Date: \_\_\_\_\_



# TWO TRUTHS & ONE LIE!

Use your math skills to determine which of the three statements below is a dirty lie! Explain how you made your decision.

## FOOD MENU



\$1.25




\$1.00





\$2.50



\$0.75

1)  = \$5.00

2)  < \$4.25

3)  > 

My Answer: \_\_\_\_\_

Key: 3