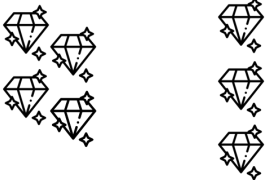


Name: \_\_\_\_\_

# Subtract Three

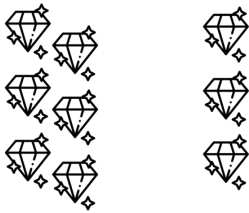
Directions: Find each difference.

**4 - 3 =**



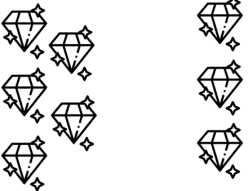
A box containing a subtraction problem. On the left, the number 4 is written in large black font. Below it are four diamond icons arranged in a 2x2 grid. To the right of the 4 is a minus sign, followed by the number 3 in large black font. Below the 3 are three diamond icons arranged in a vertical column. To the right of the 3 is an equals sign, followed by an empty square box for the answer.

**6 - 3 =**



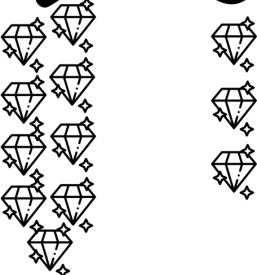
A box containing a subtraction problem. On the left, the number 6 is written in large black font. Below it are six diamond icons arranged in two vertical columns of three. To the right of the 6 is a minus sign, followed by the number 3 in large black font. Below the 3 are three diamond icons arranged in a vertical column. To the right of the 3 is an equals sign, followed by an empty square box for the answer.

**5 - 3 =**



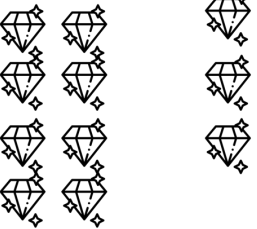
A box containing a subtraction problem. On the left, the number 5 is written in large black font. Below it are five diamond icons arranged in two vertical columns: one with two diamonds and one with three diamonds. To the right of the 5 is a minus sign, followed by the number 3 in large black font. Below the 3 are three diamond icons arranged in a vertical column. To the right of the 3 is an equals sign, followed by an empty square box for the answer.

**9 - 3 =**




A box containing a subtraction problem. On the left, the number 9 is written in large black font. Below it are nine diamond icons arranged in three vertical columns of three. To the right of the 9 is a minus sign, followed by the number 3 in large black font. Below the 3 are three diamond icons arranged in a vertical column. To the right of the 3 is an equals sign, followed by an empty square box for the answer.

**8 - 3 =**



A box containing a subtraction problem. On the left, the number 8 is written in large black font. Below it are eight diamond icons arranged in two vertical columns of four. To the right of the 8 is a minus sign, followed by the number 3 in large black font. Below the 3 are three diamond icons arranged in a vertical column. To the right of the 3 is an equals sign, followed by an empty square box for the answer.

**7 - 3 =**



A box containing a subtraction problem. On the left, the number 7 is written in large black font. Below it are seven diamond icons arranged in two vertical columns: one with four diamonds and one with three diamonds. To the right of the 7 is a minus sign, followed by the number 3 in large black font. Below the 3 are three diamond icons arranged in a vertical column. To the right of the 3 is an equals sign, followed by an empty square box for the answer.