








Name: \_\_\_\_\_




# HAPPY ST. PATRICK'S DAY!



## TWO TRUTHS + ONE LIE!

Use your math skills to determine which of the three statements below is a dirty lie! Explain how you made your decision.

 = 3       = 5       = 9

1  +  +  = 

2  -  = 

3  +  = 12

SAMPLE

My Answer: \_\_\_\_\_

Key: 2



This activity is a free sample from the  
K-8 Math Worksheet Libraries  
available on our membership site.

Visit [www.mashupmath.com/membership-plans](http://www.mashupmath.com/membership-plans)  
to learn more and sign-up for a free trial today!



**Gain on-demand access to ALL of our math resources!**

