

Name: _____

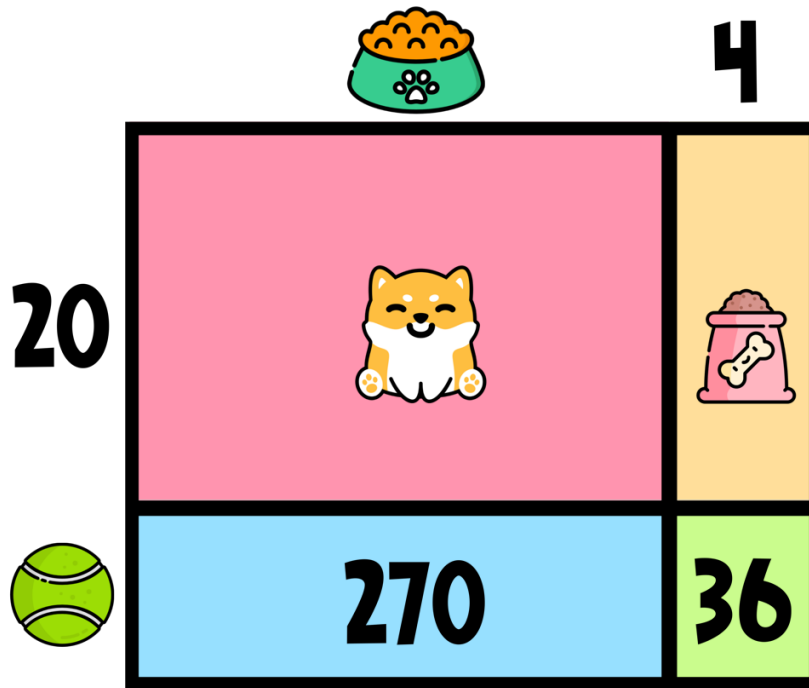






HAPPY PUPPY DAY!

Puppy Day, celebrated on March 23rd, is a heartwarming occasion dedicated to recognizing the love, joy, and companionship that puppies bring into our lives, encouraging adoption from shelters and responsible pet care.


Directions: Find the value of each symbol in the area model below so that the entire box represents the value:

986



| | | | |
|---|---|---|--|
|  |  |  |  |
| <input type="text"/> | <input type="text"/> | <input type="text"/> | <input type="text"/> |

Answer Key: 34×29



Area Models work like a Bingo Board where each box represents the product of its corresponding column and row and the sum of all four inner boxes represents the total.

