




Name: \_\_\_\_\_





# HAPPY PRETZEL DAY!

Pretzel Day, celebrated on April 26<sup>th</sup>, is a day dedicated to enjoying the twisty, salty treat that is the pretzel, whether soft or hard, plain or garnished, in all its delicious and doughy varieties.

**Directions:** Find the value of each symbol in the area model below so that the entire box represents the value:

## 1,276

		4
	80	
9	360	

			
<input type="text"/>	<input type="text"/>	<input type="text"/>	<input type="text"/>

Answer Key:  $44 \times 29$



Area Models work like a Bingo Board where each box represents the product of its corresponding column and row and the sum of all four inner boxes represents the total.

