

Name: _____

Date: _____







TWO TRUTHS & ONE LIE!

Use your math skills to determine which of the three statements below is a dirty lie! Explain how you made your decision.

 = 1  = 3  = 9

1  :  &  : 

ARE EQUIVALENT RATIOS

2  /  &  / 

ARE EQUIVALENT FRACTIONS

3  :  &  : 

ARE EQUIVALENT RATIOS

My Answer: _____

Key: 3