



Name: _____

Date: _____



TWO TRUTHS & ONE LIE!

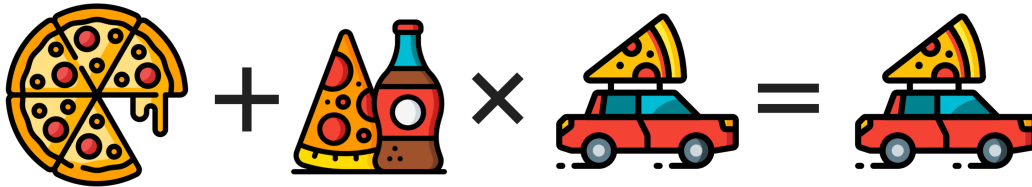
Use your math skills to determine which of the three statements below is a dirty lie! Explain how you made your decision.



1



2



3



My Answer: _____

Key: 2