

Name: _____

HAPPY PEANUT BUTTER DAY!

Directions: Use your math skills to find the value of each symbol in the multiplication table below:




	2		
	3		15
	0		



	<input type="text"/>		<input type="text"/>		<input type="text"/>
	<input type="text"/>		<input type="text"/>		
	<input type="text"/>		<input type="text"/>		




Answer Key:

	0		1		10
	3		6		
	5		9		

Multiplication tables work like a Bingo Board where each box represents the product of its corresponding column and row.

		2	
		↓	↓
4	→		
			↓
	→		9

 = 2 × 4 →  = 8

9 =  ×  →  = 3