

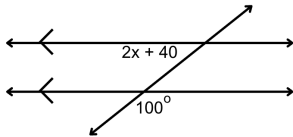
Name: _____

Parallel Lines and Transversals (algebraic)

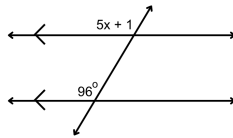


Directions: Solve for x . Justify the set up.

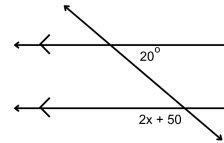
1.



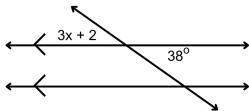
5.



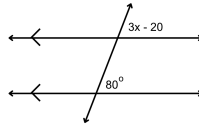
9.



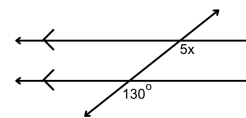
2.



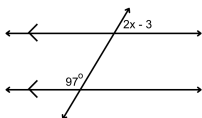
6.



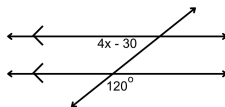
10.



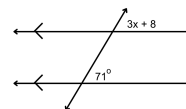
3.



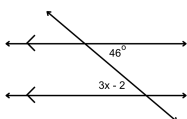
7.



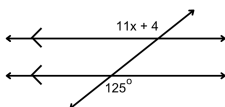
11.



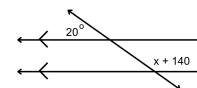
4.



8.

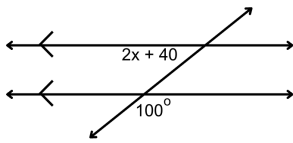


12.



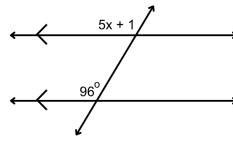
ANSWER KEY

1.



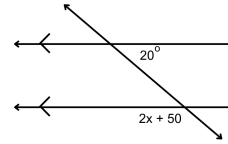
20

5.



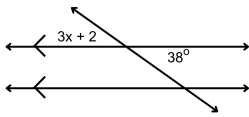
19

9.



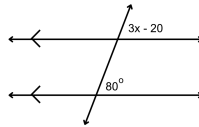
55

2.



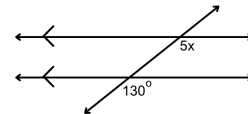
12

6.



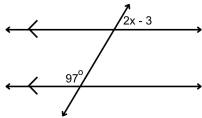
100/3

10.



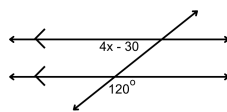
26

3.



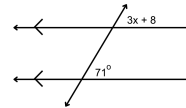
43

7.



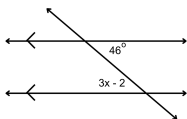
45/2

11.



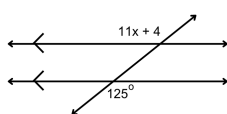
21

4.



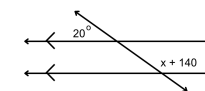
16

8.



11

12.



20