

Name: _____

HAPPY PANCAKES DAY!



TWO TRUTHS & ONE LIE!

Use your math skills to determine which of the three statements below is a dirty lie! Explain how you made your decision.

WEIGHT



1 KILOGRAM







1,000 GRAMS



500 KILOGRAMS

1)  $>$ 

2)  $=$ 

3)  $<$ 

My Answer: _____

Key: 3