

Name: _____



Date: _____






TWO TRUTHS & ONE LIE!

Use your math skills to determine which of the three statements below is a dirty lie! Explain how you made your decision.

$$\text{Cookie} = 8 \quad \text{Glass of Milk} = 4 \quad \text{Ice Cream} = 20$$

1  =  +  + 

2  +  =  - 

3  +  +  +  = 22

My Answer: _____

Key: 3