

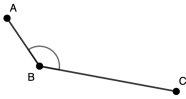
Name: \_\_\_\_\_



# NAMING ANGLES

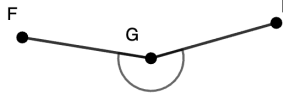
Directions: Use all three points and name each angle.

1.



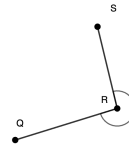
\_\_\_\_\_

5.



\_\_\_\_\_

9.



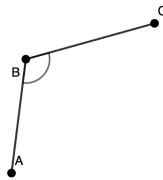
\_\_\_\_\_

2.



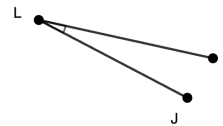
\_\_\_\_\_

6.



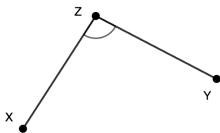
\_\_\_\_\_

10.



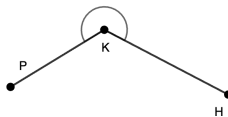
\_\_\_\_\_

3.



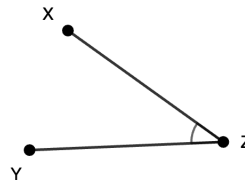
\_\_\_\_\_

7.



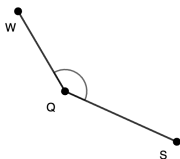
\_\_\_\_\_

11.



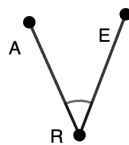
\_\_\_\_\_

4.



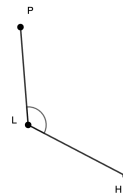
\_\_\_\_\_

8.



\_\_\_\_\_

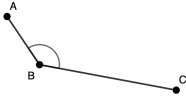
12.



\_\_\_\_\_

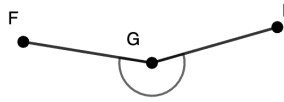
# ANSWER KEY

1.



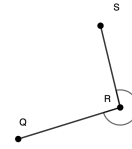
$\angle ABC$  or  $\angle CBA$

5.



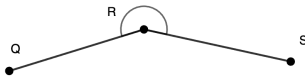
$\angle FGD$  or  $\angle DGF$

9.



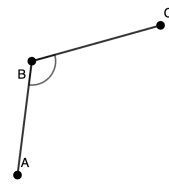
$\angle QRS$  or  $\angle SRQ$

2.



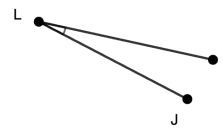
$\angle QRS$  or  $\angle SRQ$

6.



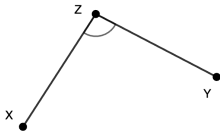
$\angle ABC$  or  $\angle CBA$

10.



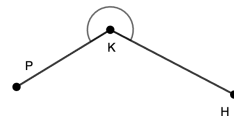
$\angle JPL$  or  $\angle PLJ$

3.



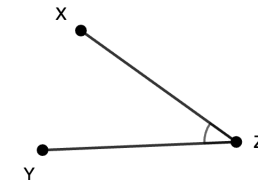
$\angle XZY$  or  $\angle YZX$

7.



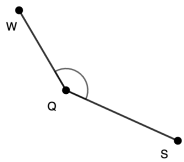
$\angle PKH$  or  $\angle HKP$

11.



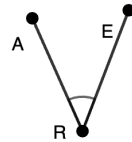
$\angle XZY$  or  $\angle YZX$

4.



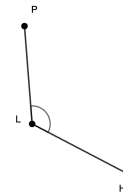
$\angle WQS$  or  $\angle SQW$

8.



$\angle ARE$  or  $\angle ERA$

12.



$\angle PLH$  or  $\angle HLP$