



Name: \_\_\_\_\_

## Measuring Using a Ruler (in centimeters)


Directions: Measure each object using the given ruler.



The object is \_\_\_\_\_ centimeters long.




The object is \_\_\_\_\_ centimeters long.



The object is \_\_\_\_\_ centimeters long.



The object is \_\_\_\_\_ centimeters long.



The object is \_\_\_\_\_ centimeters long.

## **ANSWER KEY**

**10 cm**

**7 cm**

**20 cm**

**11 cm**

**15 cm**