

Name: \_\_\_\_\_

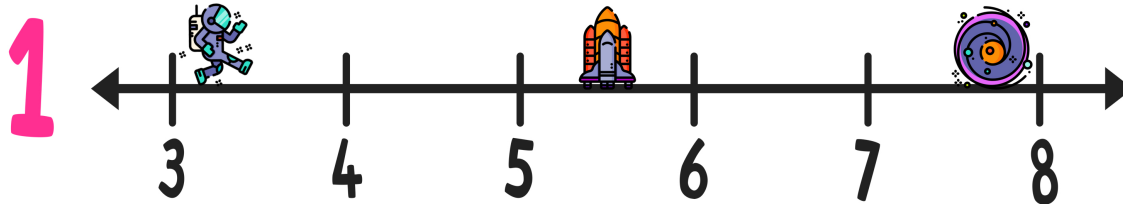
Date: \_\_\_\_\_



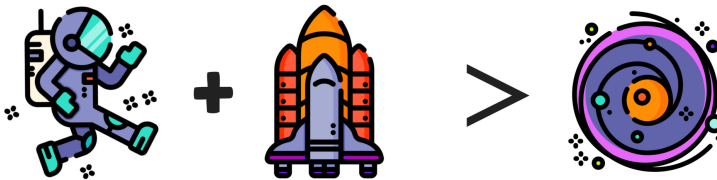
# TWO TRUTHS & ONE LIE!

Use your math skills to determine which of the three statements below is a dirty lie! Explain how you made your decision.

 =  $3\frac{7}{8}$      =  $5\frac{1}{2}$      =  $7\frac{5}{6}$




2



$\text{Astronaut} + \text{Rocket} > \text{Planet}$

3



$2\frac{1}{3} = \text{Planet} - \text{Rocket}$

My Answer: \_\_\_\_\_

Key: 1



This activity is a free sample from the  
K-8 Math Worksheet Libraries  
available on our membership site.

Visit [www.mashupmath.com/membership-plans](http://www.mashupmath.com/membership-plans)  
to learn more and sign-up for a free trial today!



**Gain on-demand access to ALL of our math resources!**

