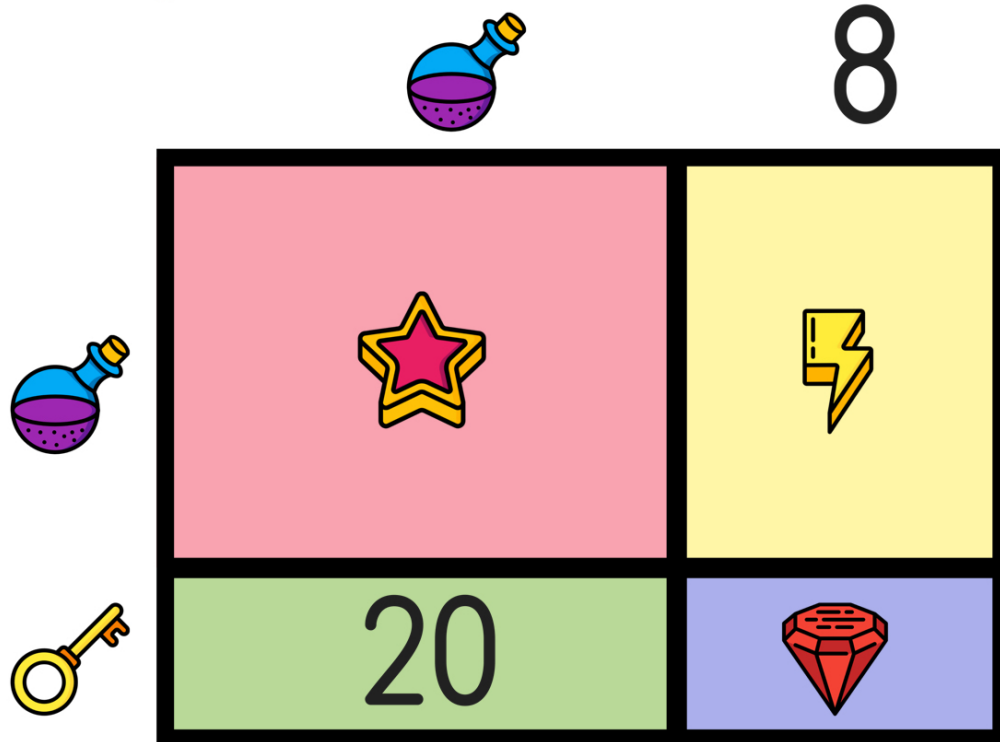







Name: _____

READY FOR A CHALLENGE?

Directions: Find the value of each symbol in the area model below so that the entire box represents the value:

216



				
<input type="text"/>	<input type="text"/>	<input type="text"/>	<input type="text"/>	<input type="text"/>

Key:

$$18 \times 12 = 216$$

$$\text{Bolt} = 80$$

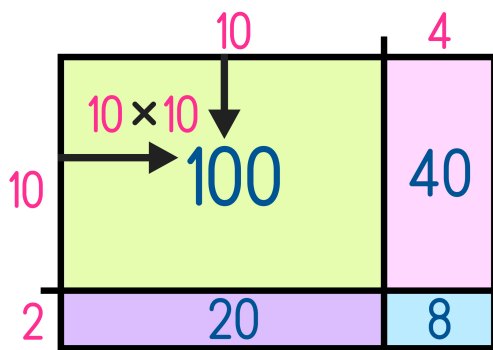
$$\text{Potion} = 10$$

$$\text{Star} = 100$$

$$\text{Gem} = 16$$

$$\text{Key} = 2$$

Area Models work like a Bingo Board where each box represents the product of its corresponding column and row and the sum of all four inner boxes represents the total.



$$14 \times 12 = 168$$

$$\begin{array}{r} \rightarrow 100 \\ 40 \\ 20 \\ + 8 \\ \hline 168 \end{array}$$



This activity is a free sample from the K-8 Math Worksheet Libraries available on our membership site.

Visit www.mashupmath.com/membership-plans to learn more and sign-up for a free trial today!

