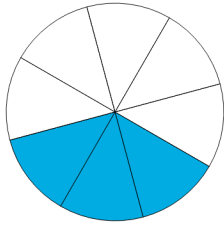


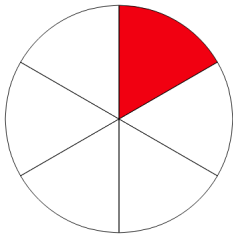
Name: _____

Matching Fractions with Diagrams

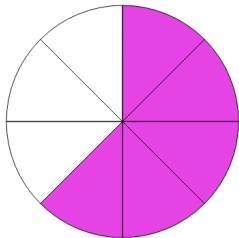
Directions: Match each fraction with the image that represents it.



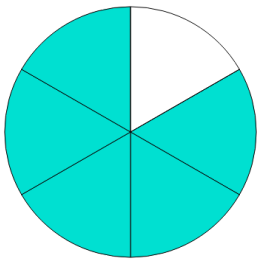
$$\frac{5}{8}$$



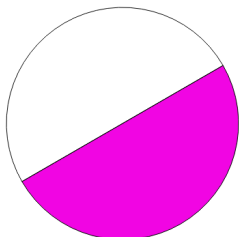
$$\frac{5}{6}$$



$$\frac{1}{6}$$

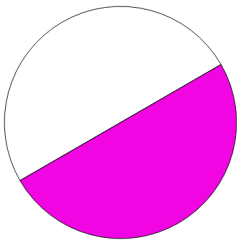
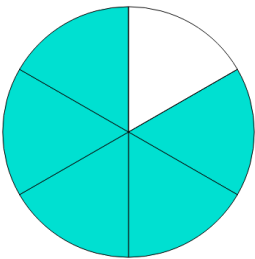
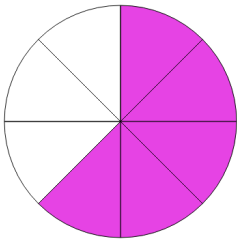
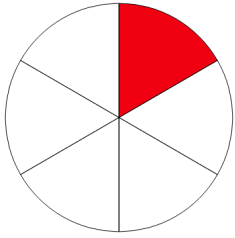
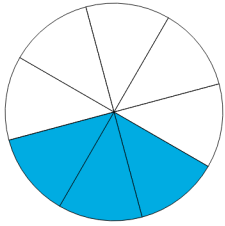


$$\frac{1}{2}$$



$$\frac{3}{8}$$

ANSWER KEY



$\frac{5}{8}$

$\frac{5}{6}$

$\frac{1}{6}$

$\frac{1}{2}$

$\frac{3}{8}$

