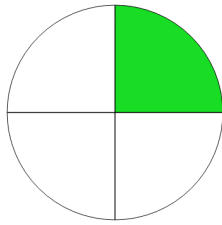


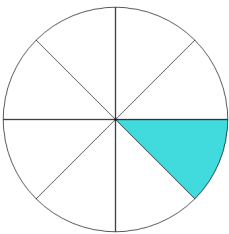
Name: _____

Matching Fractions with Diagrams

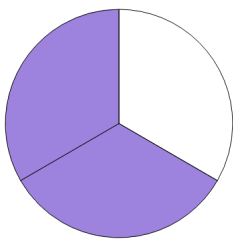
Directions: Match each fraction with the image that represents it.



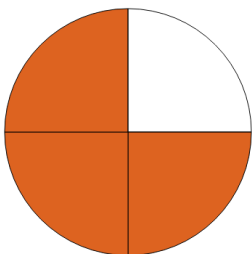
$$\frac{2}{3}$$



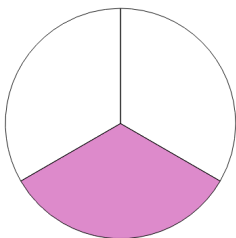
$$\frac{1}{8}$$



$$\frac{1}{3}$$

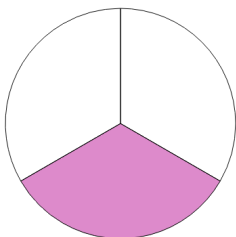
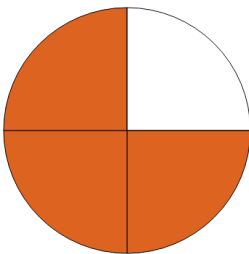
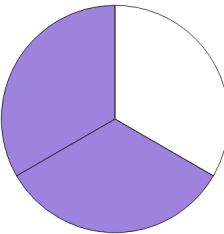
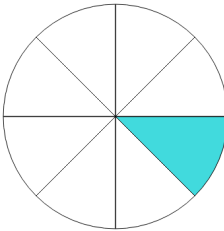
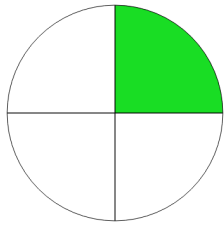


$$\frac{1}{4}$$



$$\frac{3}{4}$$

ANSWER KEY



$\frac{2}{3}$

$\frac{1}{8}$

$\frac{1}{3}$

$\frac{1}{4}$

$\frac{3}{4}$