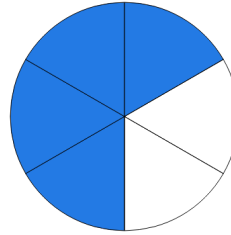


Name: _____

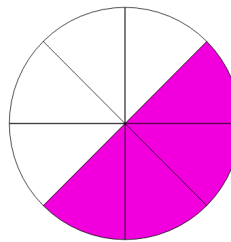
Matching Diagrams with Fractions

Directions: Match each image with the fraction it represents

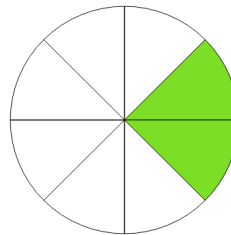
$$\frac{2}{8}$$



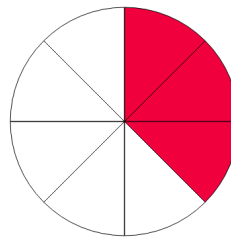
$$\frac{3}{8}$$



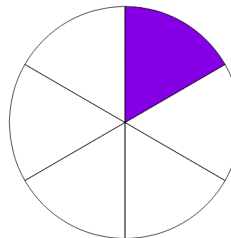
$$\frac{4}{8}$$



$$\frac{4}{6}$$

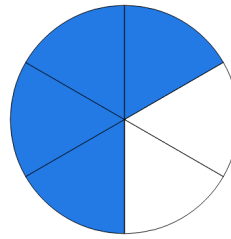


$$\frac{1}{6}$$

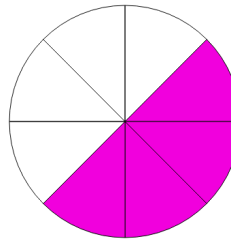


ANSWER KEY

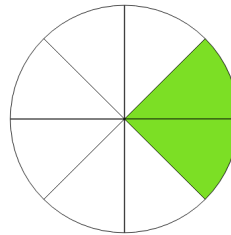
$\frac{2}{8}$



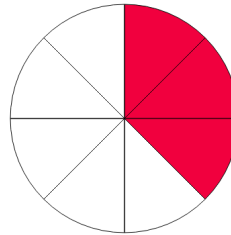
$\frac{3}{8}$



$\frac{4}{8}$



$\frac{4}{6}$



$\frac{1}{6}$

