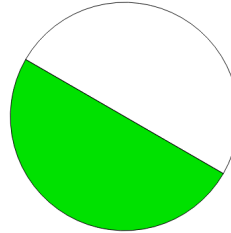


Name: _____

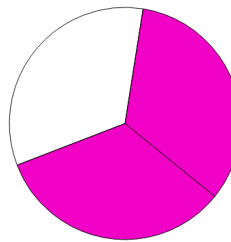
Matching Diagrams with Fractions

Directions: Match each image with the fraction it represents

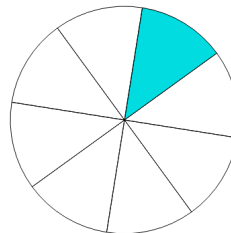
$$\frac{1}{8}$$



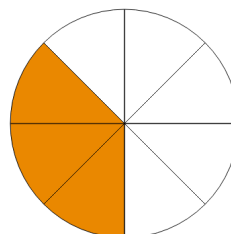
$$\frac{1}{6}$$



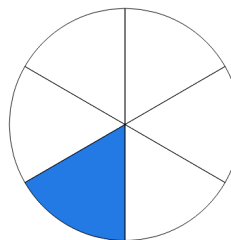
$$\frac{1}{2}$$



$$\frac{2}{3}$$

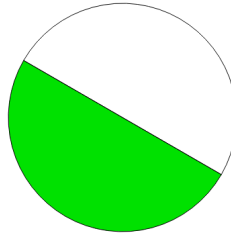


$$\frac{3}{8}$$

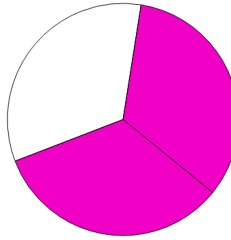


ANSWER KEY

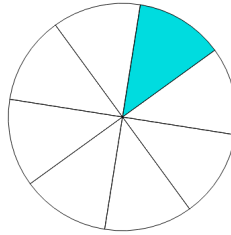
$\frac{1}{8}$



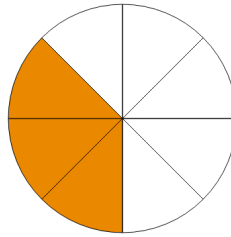
$\frac{1}{6}$



$\frac{1}{2}$



$\frac{2}{3}$



$\frac{3}{8}$

