







Name: \_\_\_\_\_

# HAPPY VALENTINE'S DAY!

**Directions:** Observe the scales below and use your math skills to find the weight of each object.



		
<input type="text"/>	<input type="text"/>	<input type="text"/>

SAMPLE

# ANSWER KEY

Teddy Bear=9oz

Flowers=101oz

Short Cake=8oz



This activity is a free sample from the  
**K-8 Math Worksheet Libraries**  
available on our membership site.

Visit [www.mashupmath.com/membership-plans](http://www.mashupmath.com/membership-plans)  
to learn more and sign-up for a free trial today!



**Gain on-demand access to ALL of our math resources!**

