









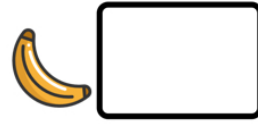


Name: _____

READY FOR A CHALLENGE?

Directions: Use your math skills to find the value of each symbol in the multiplication table below:

		7	
8			
	8		24
			144



Key:

Lemon=84

Raspberry=12

Pear=2

Banana=4

Kiwi=56

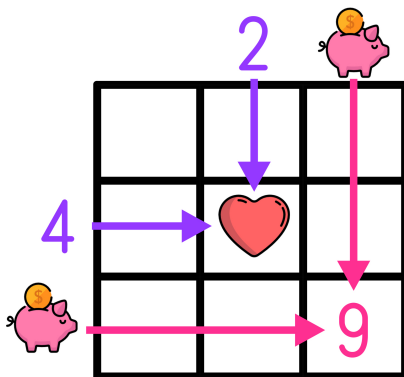
Cherries=48

Watermelon=14

Pineapple=32

Apple=96

Multiplication tables work like a Bingo Board where each box represents the product of its corresponding column and row.



$$\text{♥} = 2 \times 4 \rightarrow \text{♥} = 8$$

$$9 = \text{piggy bank} \times \text{piggy bank} \rightarrow \text{piggy bank} = 3$$