
















Name: _____

READY FOR A CHALLENGE?

Directions: Use your math skills to find the value of each symbol in the multiplication table below:

	8		
		0	
	8		11
	16	18	

	<input type="text"/>		<input type="text"/>
	<input type="text"/>		<input type="text"/>
	<input type="text"/>		<input type="text"/>

Key:

Shell Fossil=9

Triceratops=2

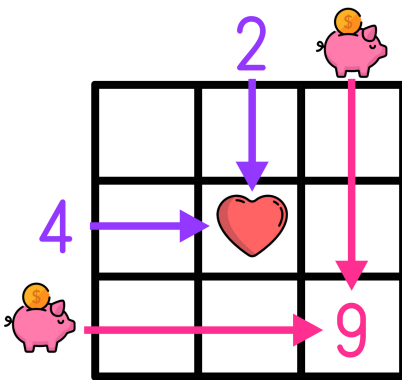
Volcano=1

Plant=22

T-Rex=11

Mosquito=0

Multiplication tables work like a Bingo Board where each box represents the product of its corresponding column and row.



$$\text{Heart} = 2 \times 4 \rightarrow \text{Heart} = 8$$

$$9 = \text{Piggy Bank} \times \text{Piggy Bank} \rightarrow \text{Piggy Bank} = 3$$