








Name: \_\_\_\_\_

# HAPPY VALENTINE'S DAY!


**Directions:** Use your math skills to find the value of each symbol in the multiplication table below:



	2		6
	2		6
4			24
6		18	





SAMPLE

Answer Key:

 **3**  
 **1**  
 **12**

 **8**  
 **36**

Multiplication tables work like a Bingo Board where each box represents the product of its corresponding column and row.

	2	4
4		
9		

$\text{heart} = 2 \times 4 \rightarrow \text{heart} = 8$   
 $9 = \text{piggy bank} \times \text{piggy bank} \rightarrow \text{piggy bank} = 3$



This activity is a free sample from the K-8 Math Worksheet Libraries available on our membership site.

Visit [www.mashupmath.com/membership-plans](http://www.mashupmath.com/membership-plans) to learn more and sign-up for a free trial today!



Gain on-demand access to ALL of our math resources!

