





Name: _____

HAPPY VALENTINE'S DAY!

Directions: Observe the scales below and use your math skills to find the weight of each object.



SAMPLE

ANSWER KEY

Teddy Bear=8.5oz

Flowers=72.5oz

Short Cake=2.1oz



This activity is a free sample from the
K-8 Math Worksheet Libraries
available on our membership site.

Visit www.mashupmath.com/membership-plans
to learn more and sign-up for a free trial today!



Gain on-demand access to ALL of our math resources!

