




Name: _____

TWO TRUTHS + ONE LIE!

Use your math skills to determine which of the three statements below is a dirty lie! Explain how you made your decision.

 = 14  = 49  = 17

1

$$68 = \left(\text{heart} \right)^2 \div \text{monkey} \times \text{envelope}$$

2

$$\left(\text{monkey} + \text{envelope} - 52 - \text{heart} \right) \left(\text{KISS ME} \right) = 0$$

3

$$\text{heart} \times \text{envelope} > 5 \times \text{monkey} - 6$$

My Answer: _____

SAMPLE

Key: 3



This activity is a free sample from the
K-8 Math Worksheet Libraries
available on our membership site.

Visit www.mashupmath.com/membership-plans
to learn more and sign-up for a free trial today!



Gain on-demand access to ALL of our math resources!

