










Name: _____





TWO TRUTHS + ONE LIE!

Use your math skills to determine which of the three statements below is a dirty lie! Explain how you made your decision.

 = 2  = 5  = 0

1  ×  = 8 + 

2  =  × 

3  -  ×  = 

SAMPLE

My Answer: _____

Key: 3



This activity is a free sample from the K-8 Math Worksheet Libraries available on our membership site.

Visit www.mashupmath.com/membership-plans to learn more and sign-up for a free trial today!



Gain on-demand access to ALL of our math resources!

