
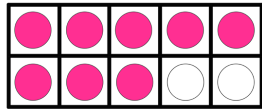


Name: \_\_\_\_\_

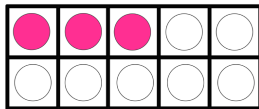
# Make Ten

Directions: Find each missing number.

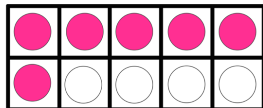

$$= 10$$



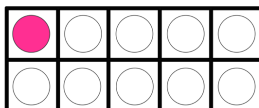
$$8 + \square = 10$$



$$3 + \square = 10$$



$$6 + \square = 10$$



$$1 + \square = 10$$