
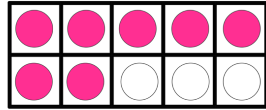


Name: \_\_\_\_\_

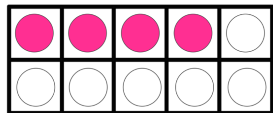
# Make Ten

Directions: Find each missing number.

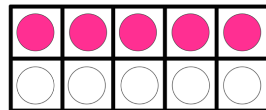

$$= 10$$



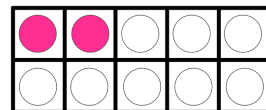
$$7 + \square = 10$$



$$4 + \square = 10$$



$$5 + \square = 10$$



$$2 + \square = 10$$