






Name: _____

READY FOR A CHALLENGE?

Directions: Use your math skills to find the value of each symbol in the multiplication table below:

				
		6	8	
	6	9	12	
	8	12		

			
<input type="text"/>	<input type="text"/>	<input type="text"/>	<input type="text"/>

Key:

Controller=3

Sneaker=4

Jersey=2

Wallet=16

Multiplication tables work like a Bingo Board where each box represents the product of its corresponding column and row.

