











Name: _____

READY FOR A CHALLENGE?

Directions: Use your math skills to find the value of each symbol in the multiplication table below:

		2	
	1		
	3		9
		12	

				
<input type="text"/>	<input type="text"/>	<input type="text"/>	<input type="text"/>	<input type="text"/>

Key:

Potion=1

Hand=3

Lips=2

Bat=6

Moon=18

Multiplication tables work like a Bingo Board where each box represents the product of its corresponding column and row.

