

















Name: _____

READY FOR A CHALLENGE?

Directions: Use your math skills to find the value of each symbol in the multiplication table below:

	0		2
	0		
			12
	0		

	<input type="text"/>		<input type="text"/>
	<input type="text"/>		<input type="text"/>
	<input type="text"/>		<input type="text"/>

Key:

Traffic Light=4

Cone=1

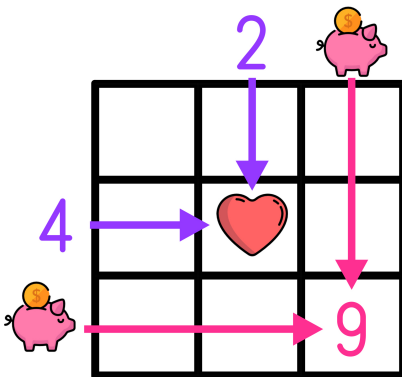
Keys=6

Car=2

Motorcycle=1

Van=0

Multiplication tables work like a Bingo Board where each box represents the product of its corresponding column and row.



$$\text{♥} = 2 \times 4 \rightarrow \text{♥} = 8$$

$$9 = \text{piggy bank} \times \text{piggy bank} \rightarrow \text{piggy bank} = 3$$