









Name: \_\_\_\_\_

# READY FOR A CHALLENGE?

**Directions:** Use your math skills to find the value of each symbol in the multiplication table below:

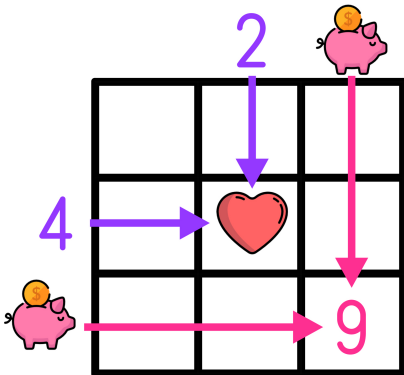
			3
5	10		15
	8		
8			24



Key:

- Cone=32
- Strawberry=20
- Cupcake=2
- Lollipop=12
- Cart=4
- Cake=16

Multiplication tables work like a Bingo Board where each box represents the product of its corresponding column and row.



$$\text{Heart} = 2 \times 4 \rightarrow \text{Heart} = 8$$

$$9 = \text{Piggy Bank} \times \text{Piggy Bank} \rightarrow \text{Piggy Bank} = 3$$